

REASONING

Mirror and Water Images Worksheet for MAH MCA CET 2025

For students preparing for MCA Entrance Exam.

1. What is the answer of this mirror image?



- A.
- B.
- C.
- D.

2. What is the mirror image of figure?



- A.
- B.
- C.



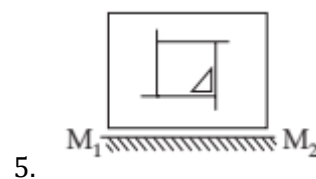
3. Which of the following is the answer of mirror image of?



- A.
- B.
- C.
- D.

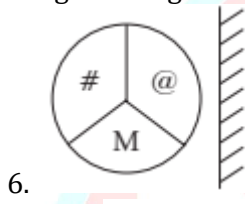
4. A clock seen through a mirror shows quarter to three. What is the correct time shown by the clock?

- A. 2:30
- B. 5:00
- C. 4:45
- D. 9:15

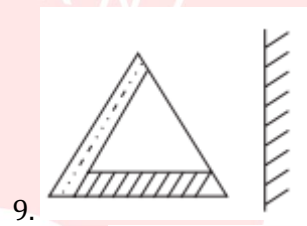
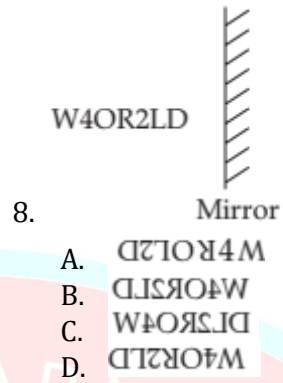


- A.
- B.
- C.
- D.

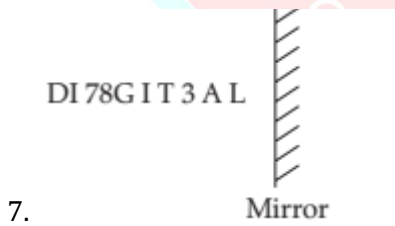
Direction (Qs. 6 - 13): Find the correct mirror image of the given figures.



- A.
- B.
- C.
- D.




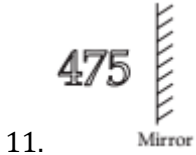
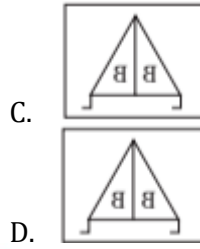
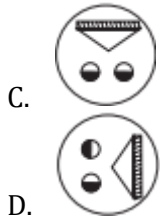
- A.
- B.
- C.
- D.



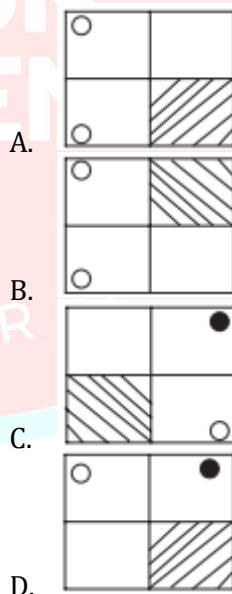
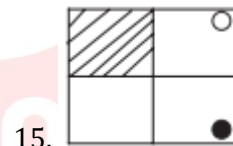
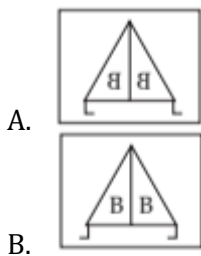
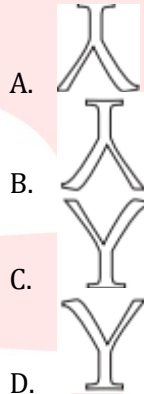
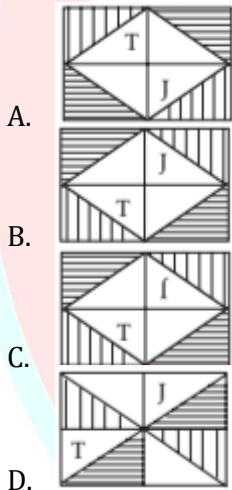
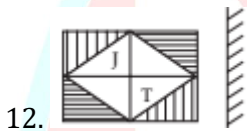
- A. 11/8GIT3AI.
- B. DI78GIT3AL
- C. JAETI087IC
- D. DI78GIT3AL



- A.
- B.

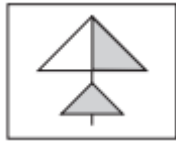


Direction (Qs. 14–20): Select the correct water image of the given figures.

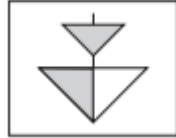




16.



A.



B.



C.



D.

17. J37OY8

A. 8Y0ZL8

B. 8Y0Z3J

C. J37OY8

D. 8Y0Z8

18. T@R#E\$T

A. T@R#E\$T

B. T@R#E\$T

C. T@R#E\$T

D. T@R#E\$T

19. 749802

A. 208647

B. 208647

C. 208647

D. 249802

20. MONSOORI

A. MONSOORI

B. MONSOORI

C. MONSOORI

D. MONSOORI

KEEP LEARNING

MCA

VISION
ACADEMY

YOUR CAREER GUIDE

Answer Key

1. D	2. D	3. D	4. D	5. B	6. D	7. C	8. B	9. B	10. A
11. A	12. C	13. D	14. A	15. C	16. A	17. C	18. B	19. B	20. D

