

REASONING

Embedded Figures Worksheet for MAH MCA CET 2025

For students preparing for MCA Entrance Exam.

Select the option in which the given figure is embedded. (Rotation is not allowed)

1.



Figure-X

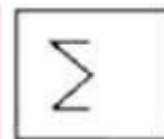
- A.
- B.
- C.
- D.

2.



- A.
- B.
- C.
- D.

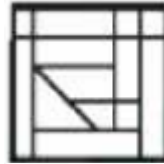
3.



- A.
- B.
- C.



D.



C.

4.

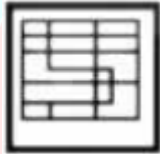


D.

6.



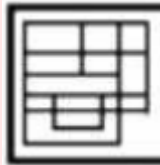
A.



B.



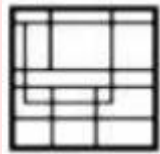
A.



C.



B.



D.



C.

5.

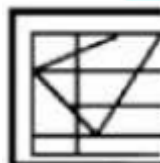


Figure-X



D.

7.



A.



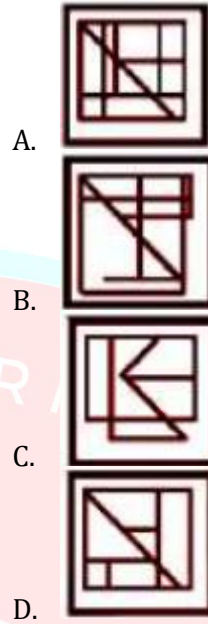
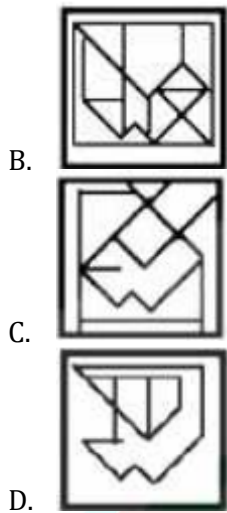
Figure-X



B.



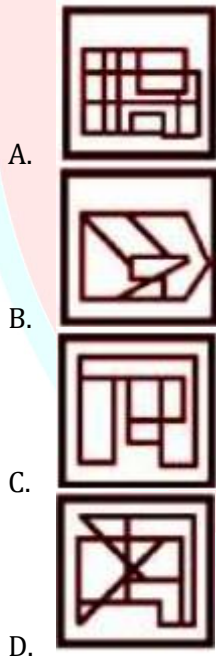
A.



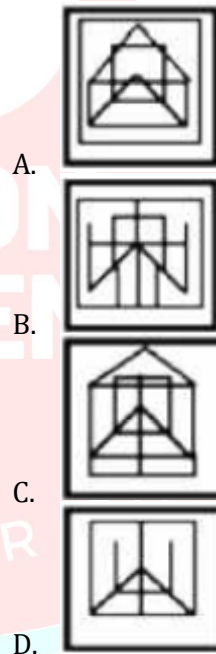
8.



(Figure X)



10.



9.



Answer Key

1. C	2. B	3. C	4. D	5. C	6. D	7. B	8. C	9. A	10. C
------	------	------	------	------	------	------	------	------	-------

